

Grade 3 Unit 6

Lesson 11

CC BY 2021 Illustrative Mathematics®


Unit 6 Lesson 11: Solve Problems Involving Time (Part 2)

WU Notice and Wonder: Band Practice (Warm up)

Student Task Statement

What do you notice? What do you wonder?

Han ate his dinner before he caught a bus.
When he got off the bus, he had to hurry to get to band practice on time.

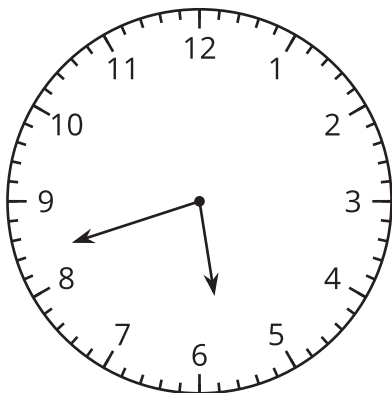


1 On the Bus Again

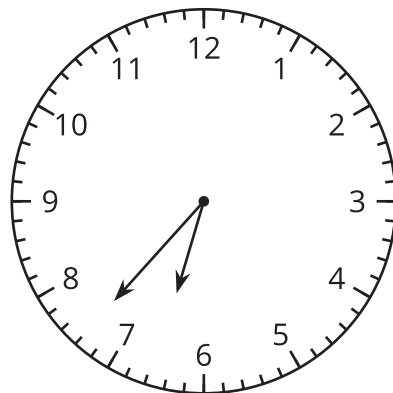
Student Task Statement

1. For how many minutes was Han on the bus? Explain or show your reasoning.

the time Han got on the bus:

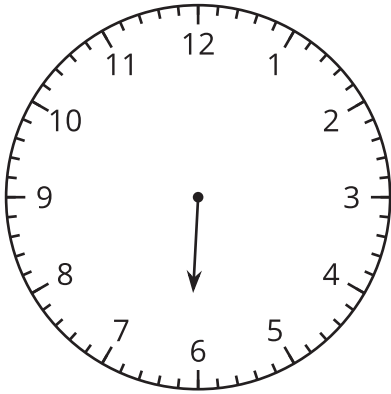


the time Han got off the bus:

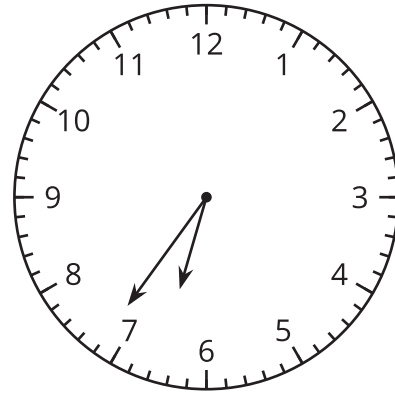


2. Draw the minute hand to show that Elena waited for the bus for 32 minutes.

the time Elena started waiting:



the time Elena got on the bus:



2 Math Libs Time

Student Task Statement

For each problem, fill in a name and an activity, and then solve the problem. Show your thinking. Organize it so it can be followed by others.

1. _____ started _____ at 8:25 a.m. and finished at 8:50 a.m. How much time was spent doing that activity?
2. _____ finished _____ at 5:38 p.m, after spending 20 minutes. What was the start time?
3. _____ started _____ at 10:45 a.m. and finished at 11:18 a.m. How much time was spent on it?
4. _____ started _____ at 3:30 p.m and took 45 minutes to complete it. What was the finish time?