

Grade 3 Unit 6

Lesson 9

CC BY 2021 Illustrative Mathematics®

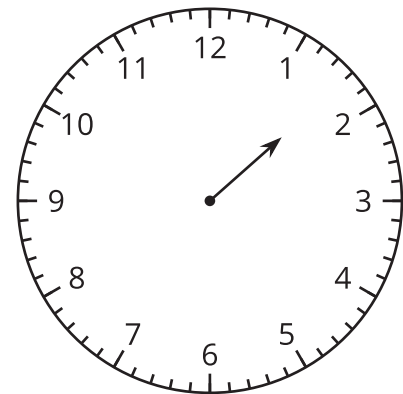
Unit 6 Lesson 9: Time to the Nearest Minute

WU Estimation Exploration: On the One Hand . . . (Warm up)

Student Task Statement

This clock only has an hour hand.

What time could it be?



Record an estimate that is:

too early	about right	too late

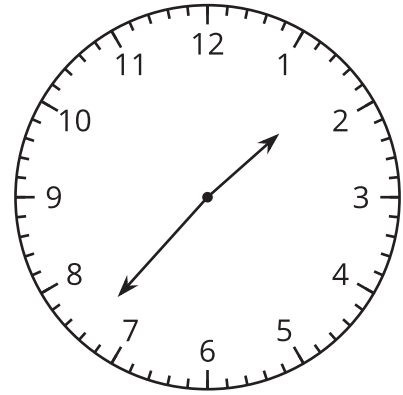
1 Just a Clock on the Wall

Student Task Statement

1. Lin says the time shown on the clock is 1:37 p.m.

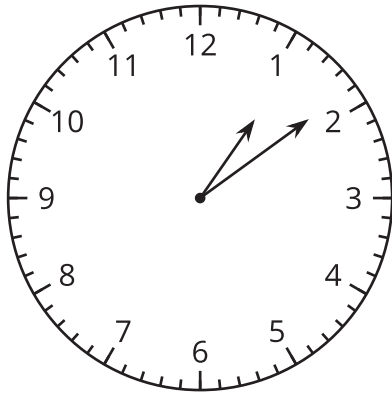
Diego says the time is 1:35 p.m.

Who do you agree with? Explain or show your reasoning.

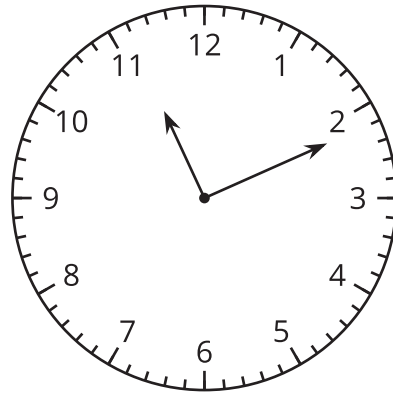


2. What time is shown on each clock?

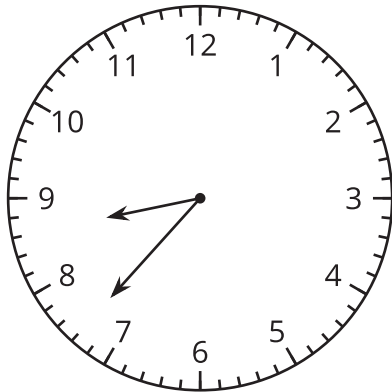
A



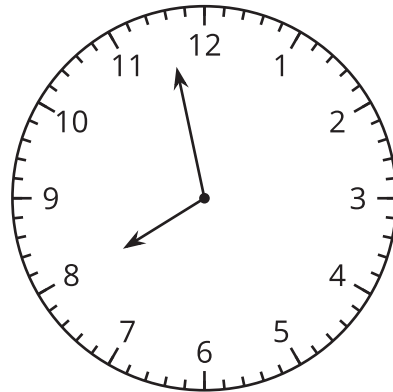
B



C



D



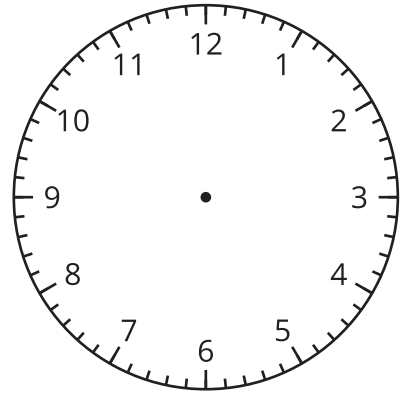
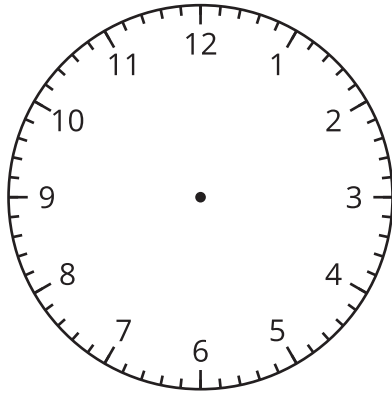
2 Show Time

Student Task Statement

1. Show the time given on each clock.

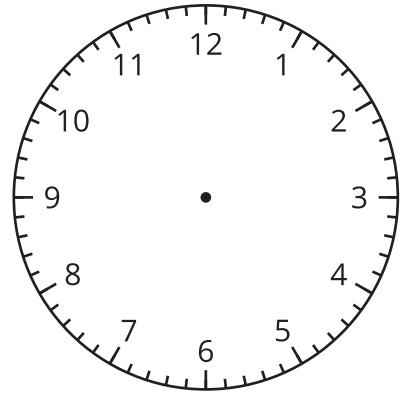
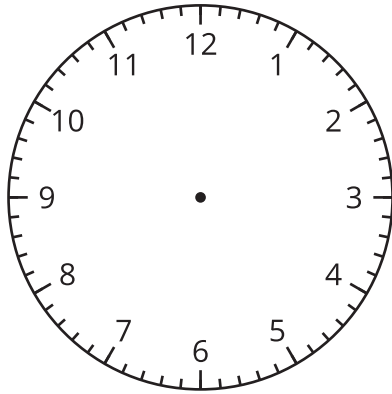
A 2:36 PM

B 3:18 PM



C 12:17 PM

D 9:02 PM



2. Draw a time on this clock. Trade with a partner and tell the time on their clock.

