

Grade 5 Unit 1

Lesson 3

CC BY 2021 Illustrative Mathematics®

Unit 1 Lesson 3: Volumes of Prism Drawings

WU Number Talk: Multiplication (Warm up)

Student Task Statement

Find the value of each expression mentally.

- 6×4
- $3 \times 2 \times 4$
- $3 \times 2 \times 5$
- $3 \times 2 \times 6$




1 Build Rectangular Prisms

Student Task Statement

The prisms on the cards are completely packed with unit cubes.

1. Pick a card.
2. Build the rectangular prism.
3. Find the volume. Explain how you found the volume to your partner.
4. Repeat.




2 Layers, layers, and more layers


Student Task Statement

The prisms are completely packed with unit cubes. Determine the volume of each prism. Explain or show your reasoning.

1.



2.



3.

