

Unit 2 Lesson 2: Scale Factors and Making Scaled Copies

1 Number Talk: Multiplying by a Unit Fraction (Warm up)

Student Task Statement

Find each product mentally.

$$\frac{1}{4} \cdot 32$$

$$(7.2) \cdot \frac{1}{9}$$

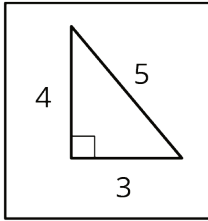
$$\frac{1}{4} \cdot (5.6)$$

2 Scaled Triangles

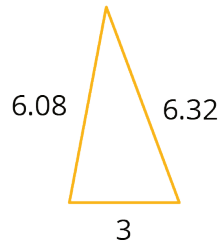
Student Task Statement

Here is Triangle O, followed by a number of other triangles.

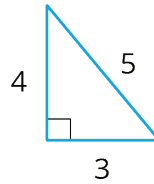
O



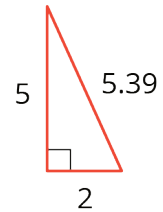
A



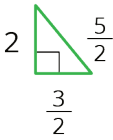
B



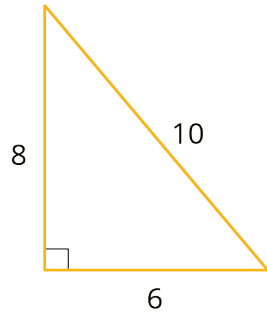
C



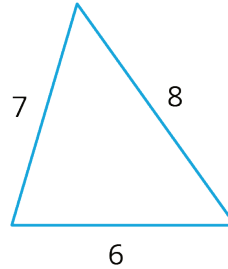
D



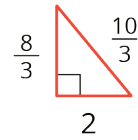
E



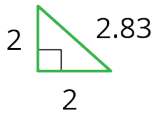
F



G



H



Your teacher will assign you two of the triangles to look at.

1. For each of your assigned triangles, is it a scaled copy of Triangle O? Be prepared to explain your reasoning.
2. As a group, identify *all* the scaled copies of Triangle O in the collection. Discuss your thinking. If you disagree, work to reach an agreement.
3. List all the triangles that are scaled copies in the table. Record the side lengths that correspond to the side lengths of Triangle O listed in each column.

Triangle O	3	4	5

4. Explain or show how each copy has been scaled from the original (Triangle O).

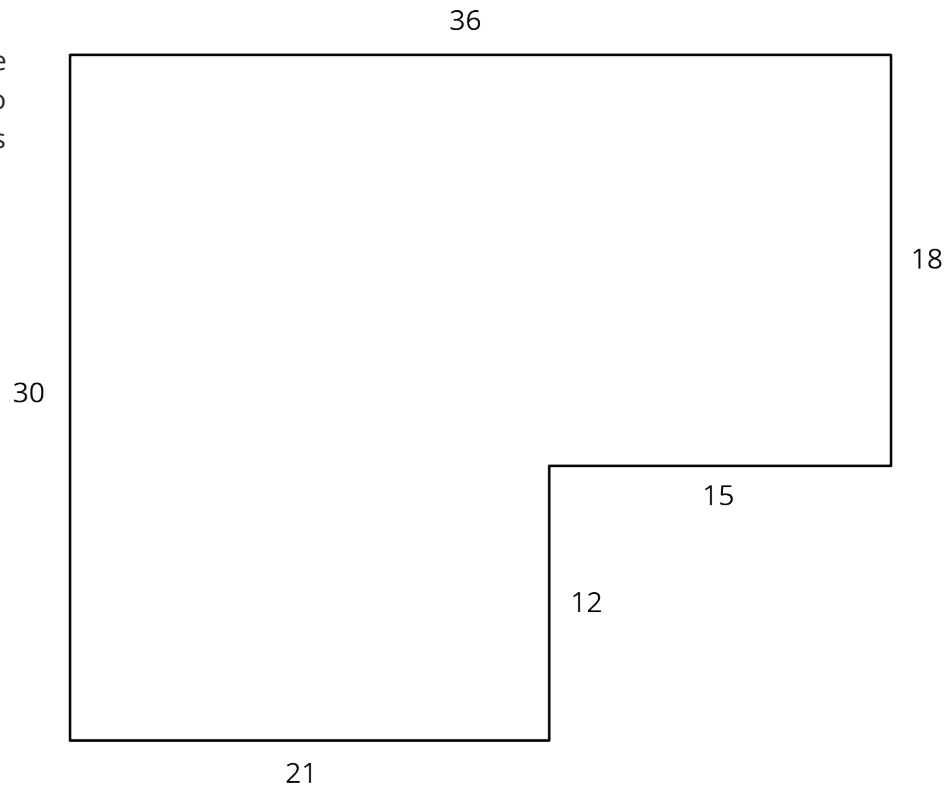
Activity Synthesis

Triangle O		3	4	5
Triangle D	$\cdot \frac{1}{2}$	$\frac{3}{2}$	2	$\frac{5}{2}$
Triangle E	$\cdot 2$	6	8	10
Triangle B	$\cdot 1$	3	4	5
Triangle G	$\cdot \frac{2}{3}$	2	$\frac{8}{3}$	$\frac{10}{3}$

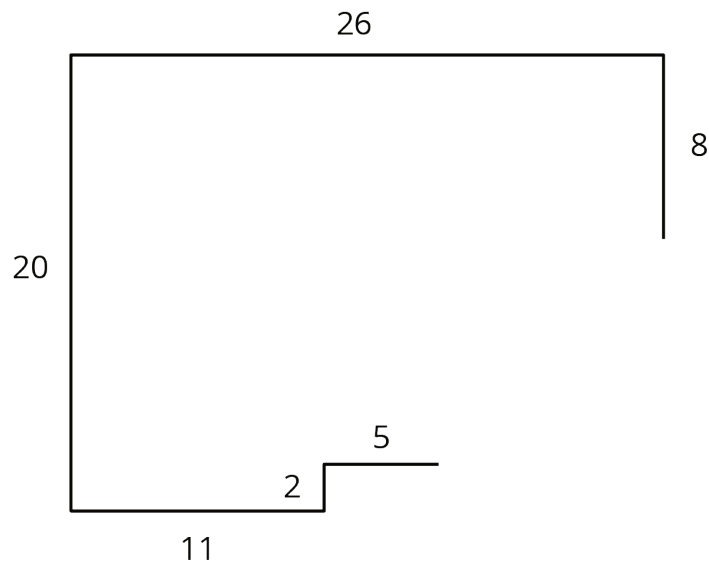
3 Which Operations? (Part 1)

Student Task Statement

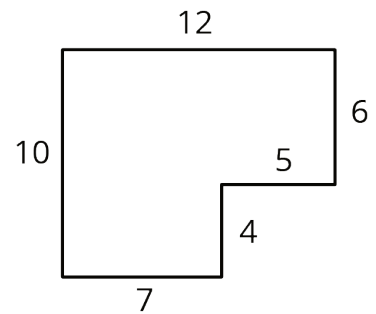
Diego and Jada want to scale this polygon so the side that corresponds to 15 units in the original is 5 units in the scaled copy.



Diego and Jada each use a different operation to find the new side lengths. Here are their finished drawings.



Diego's drawing



Jada's drawing

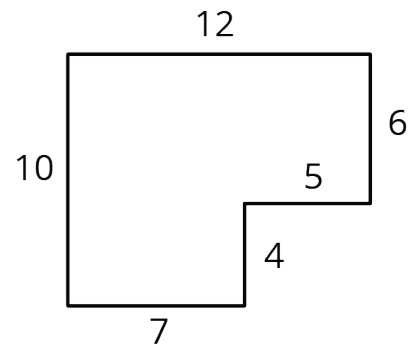
1. What operation do you think Diego used to calculate the lengths for his drawing?
2. What operation do you think Jada used to calculate the lengths for her drawing?
3. Did each method produce a scaled copy of the polygon? Explain your reasoning.

4 Which Operations? (Part 2)

Student Task Statement

Andre wants to make a scaled copy of Jada's drawing so the side that corresponds to 4 units in Jada's polygon is 8 units in his scaled copy.

1. Andre says "I wonder if I should add 4 units to the lengths of all of the segments?" What would you say in response to Andre? Explain or show your reasoning.
2. Create the scaled copy that Andre wants. If you get stuck, consider using the edge of an index card or paper to measure the lengths needed to draw the copy.



Jada's drawing