

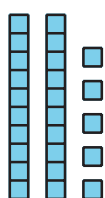
Lesson 1: Add and Subtract to Compare

- Let's solve Compare problems with larger numbers.

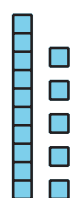
Warm-up: Which One Doesn't Belong: Compare Representations

Which one doesn't belong?

A

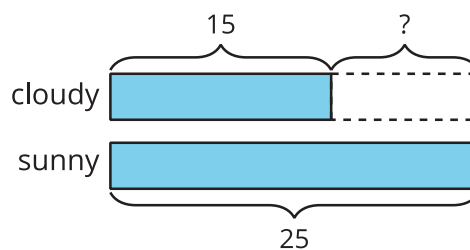


sunny

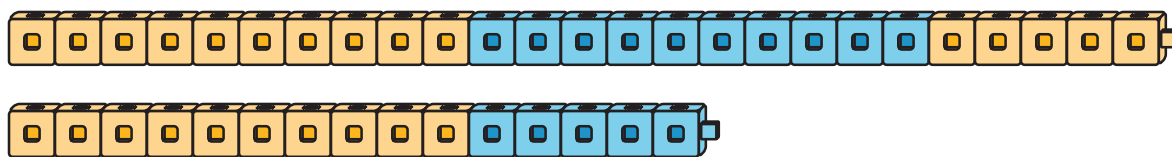


cloudy

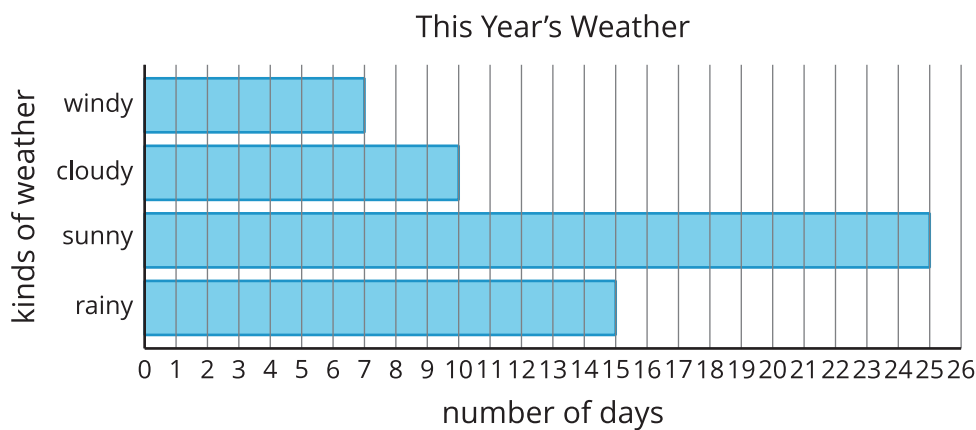
B



C

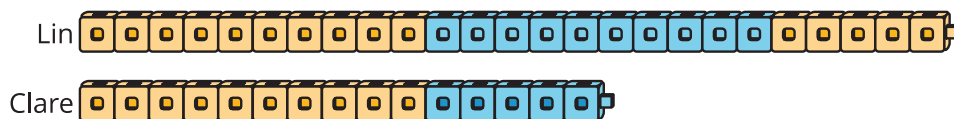


D



1.2: Build and Compare

- Lin and Clare used cubes to make trains. What do you notice?
What do you wonder?



- Make trains with cubes.

partner	number of cubes
Partner A	46
Partner B	22

- Find the total number of cubes you and your partner used.
Show your thinking.

- Find the difference between the number of cubes you and your partner used. Show your thinking.