

Grade 1 Unit 2

Lesson 20

CC BY 2021 Illustrative Mathematics®

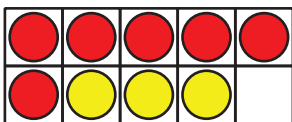
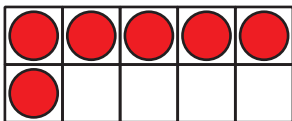
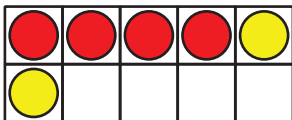
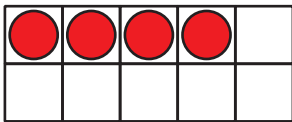
Unit 2 Lesson 20: What's the Story?

WU How Many Do You See: 10-Frames (Warm up)

Student Task Statement

How many do you see?

How do you see them?



1 Write Story Problems

Student Task Statement

Choose 2 equations. Write a story problem for each equation.

- $3 + 5 = \square$
- $4 + \square = 7$
- $10 - 5 = \square$

- $9 = 5 + \square$
- $\square + \square = 10$
- $6 + \square = 9$
- $8 = 2 + \square$

1. Equation: _____

Story Problem:

2. Equation: _____

Story Problem:

2 I've Got the Answer

Student Task Statement

Circle a number that represents your answer.

2 3 4 5 6 7 8 9 10

Write an equation that includes the number you chose.
Put a box around the number.


Equation: _____

Write a story problem that matches your equation.

Share your story problem with a partner.
Solve your partner's story problem.

Write the equation that matches the story problem.

Equation: _____

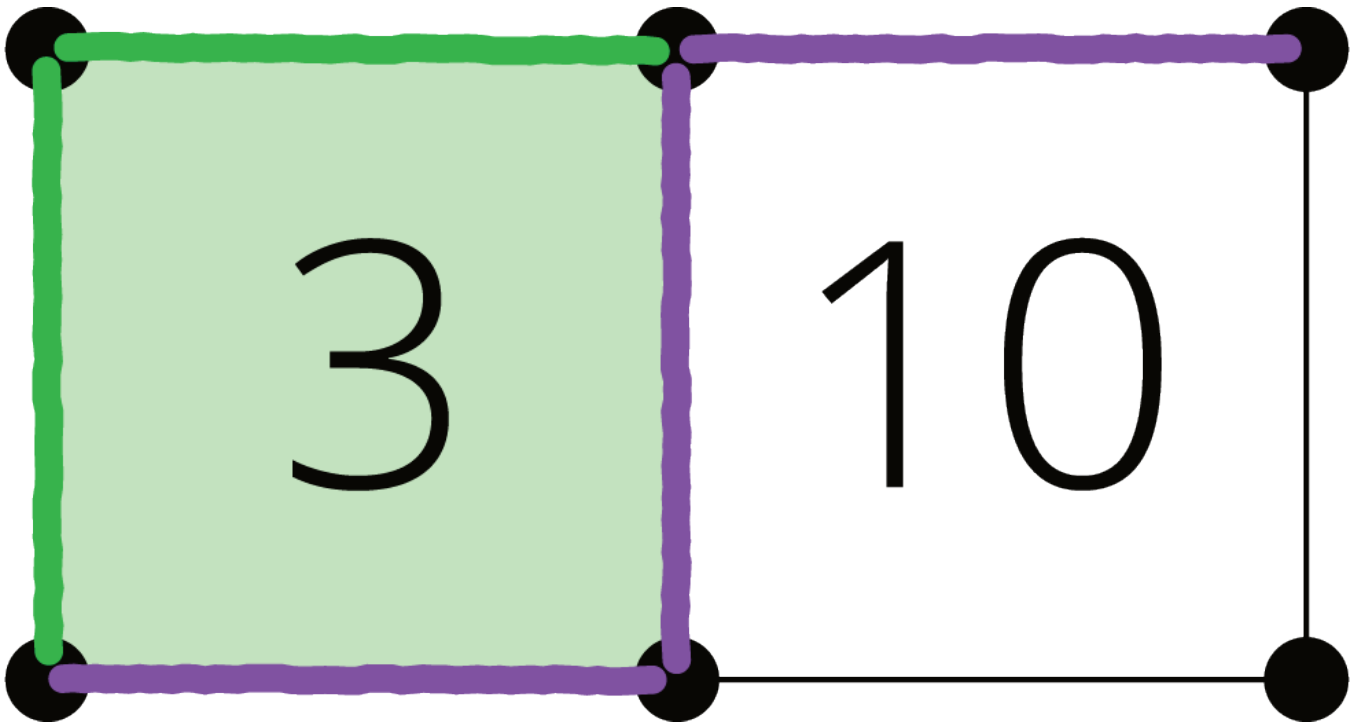


3 Centers: Choice Time

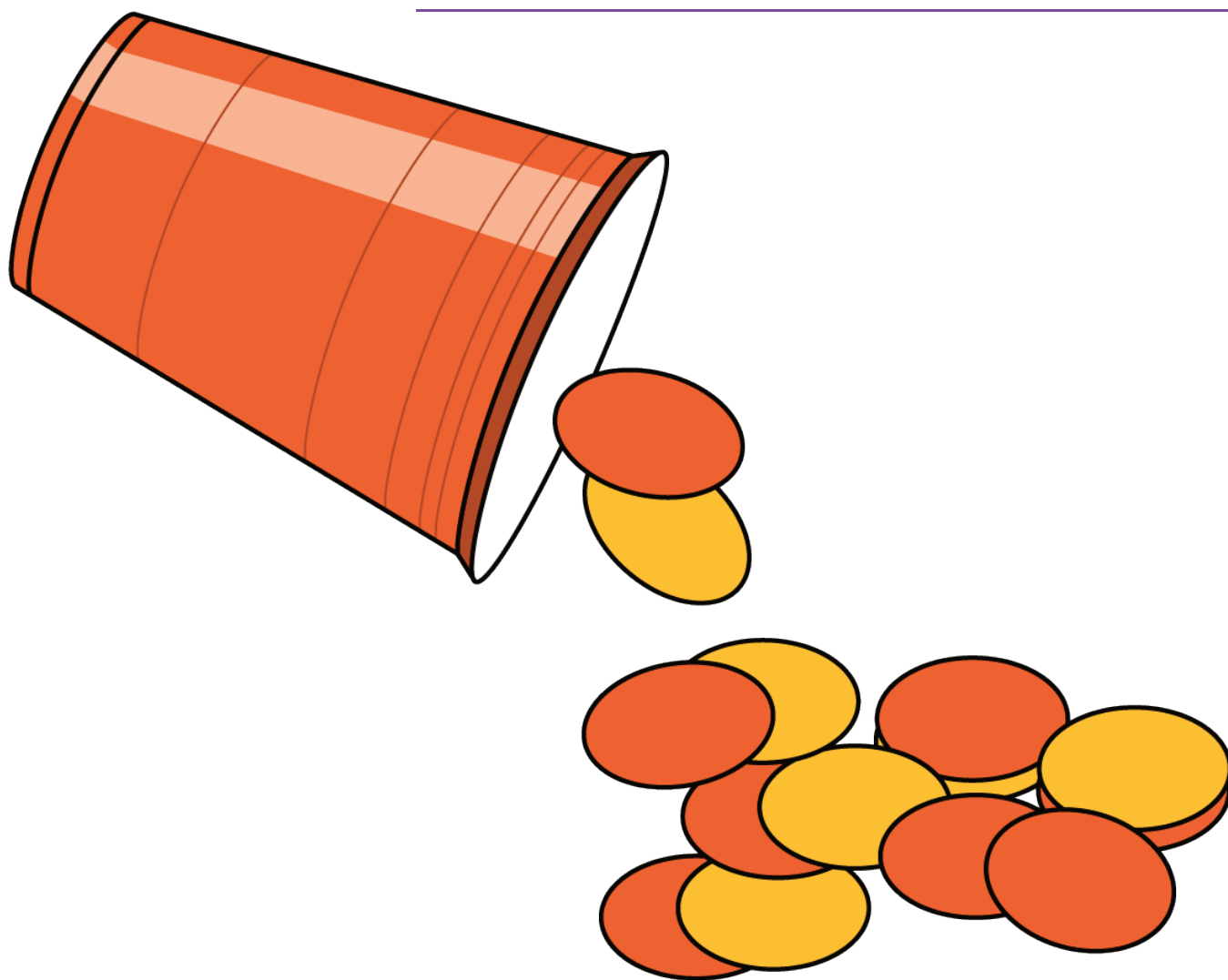
Student Task Statement

Choose a center.

Capture Squares



Shake and Spill



What's Behind My Back

