


Lesson 2: Circular Grid

Let's dilate figures on circular grids.

2.1: Notice and Wonder: Concentric Circles

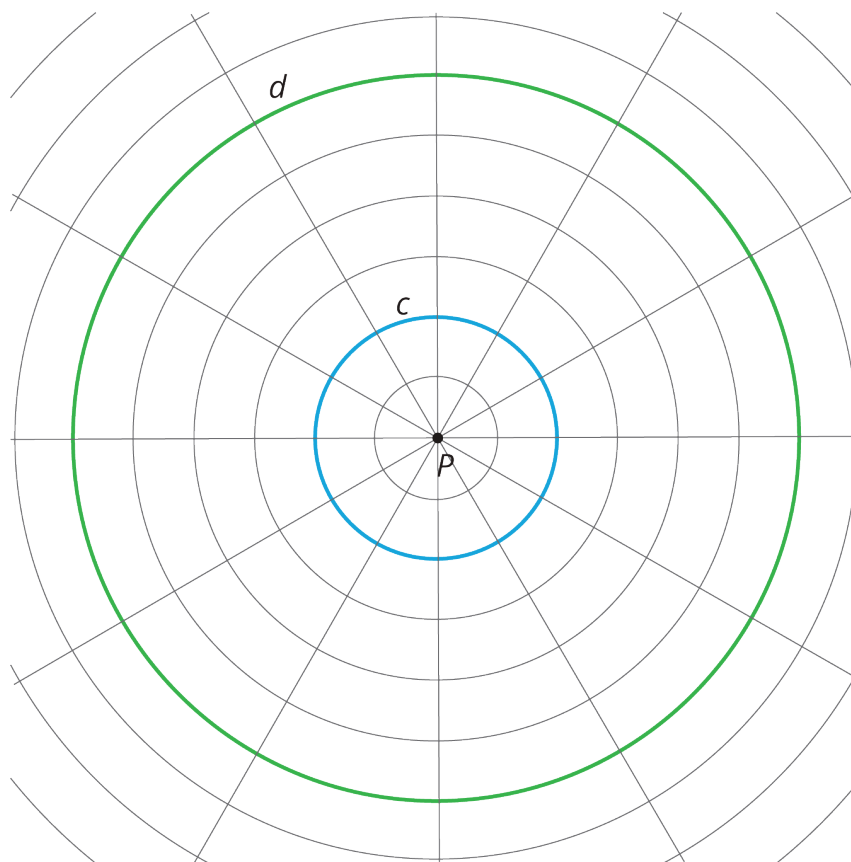


What do you notice? What do you wonder?

2.2: A Droplet on the Surface

The larger Circle d is a **dilation** of the smaller Circle c . P is the **center of dilation**.

1. Draw four points *on* the smaller circle (not inside the circle!), and label them E , F , G , and H .
2. Draw the rays from P through each of those four points.
3. Label the points where the rays meet the larger circle E' , F' , G' , and H' .



4. Complete the table. In the row labeled c , write the distance between P and the point on the smaller circle in grid units. In the row labeled d , write the distance between P and the corresponding point on the larger circle in grid units.

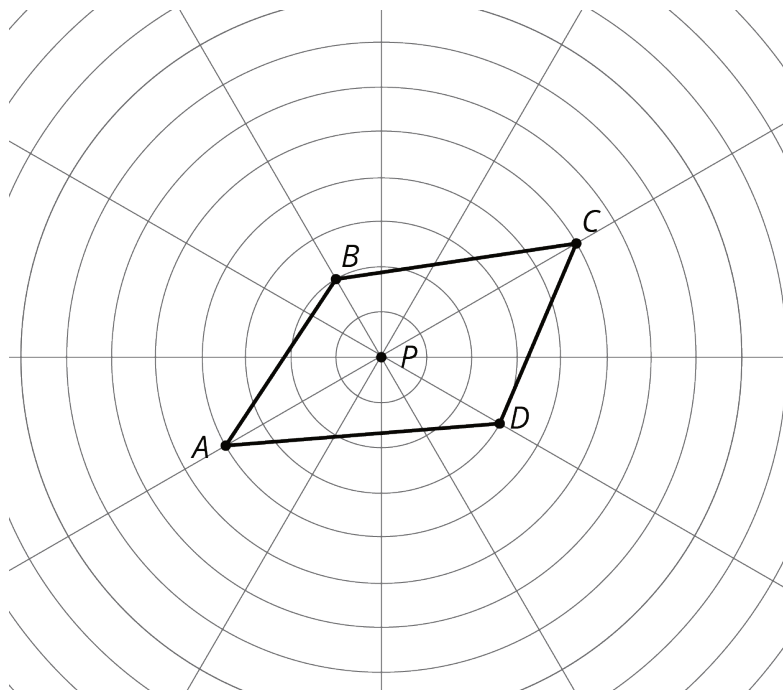
	E	F	G	H
c				
d				

5. The center of dilation is point P . What is the *scale factor* that takes the smaller circle to the larger circle? Explain your reasoning.

2.3: Quadrilateral on a Circular Grid

Here is a polygon $ABCD$.

1. Dilate each vertex of polygon $ABCD$ using P as the center of dilation and a scale factor of 2. Label the image of A as A' , and label the images of the remaining three vertices as B' , C' , and D' .
2. Draw segments between the dilated points to create polygon $A'B'C'D'$.
3. What are some things you notice about the new polygon?



4. Choose a few more points on the sides of the original polygon and transform them using the same dilation. What do you notice?

5. Dilate each vertex of polygon $ABCD$ using P as the center of dilation and a scale factor of $\frac{1}{2}$. Label the image of A as E , the image of B as F , the image of C as G and the image of D as H .

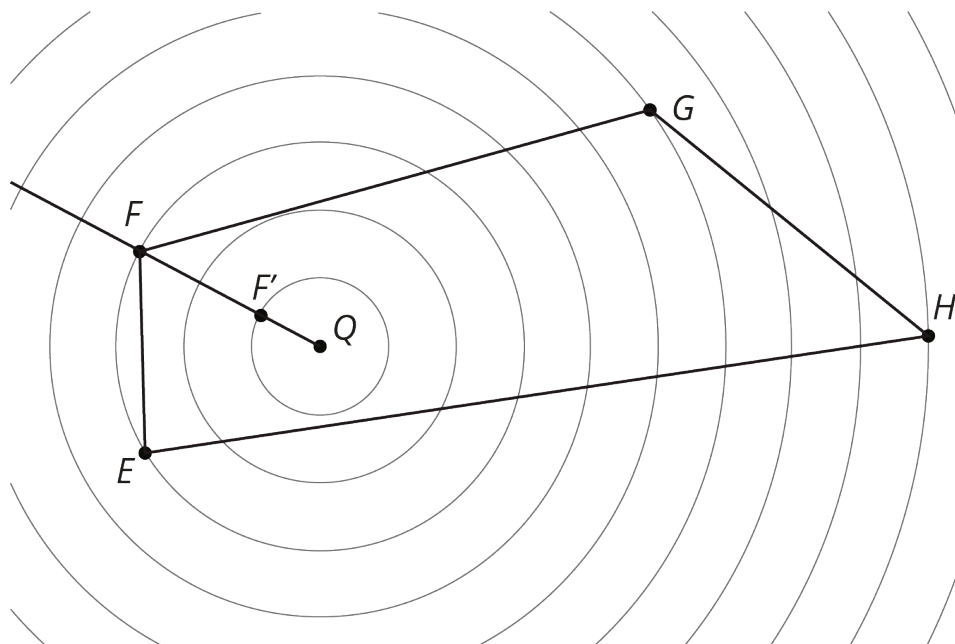
6. What do you notice about polygon $EFGH$?

Are you ready for more?

Suppose P is a point not on line segment \overline{WX} . Let \overline{YZ} be the dilation of line segment \overline{WX} using P as the center with scale factor 2. Experiment using a circular grid to make predictions about whether each of the following statements must be true, might be true, or must be false.

1. \overline{YZ} is twice as long \overline{WX} .
2. \overline{YZ} is five units longer than \overline{WX} .
3. The point P is on \overline{YZ} .
4. \overline{YZ} and \overline{WX} intersect.

2.4: A Quadrilateral and Concentric Circles

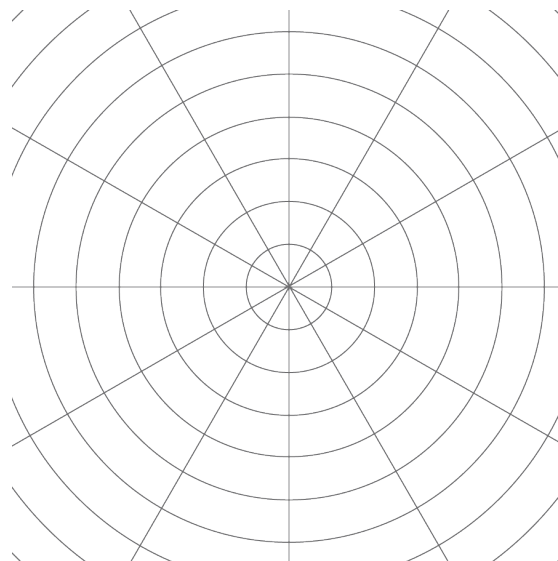


Dilate polygon $EFGH$ using Q as the center of dilation and a scale factor of $\frac{1}{3}$. The image of F is already shown on the diagram. (You may need to draw more rays from Q in order to find the images of other points.)

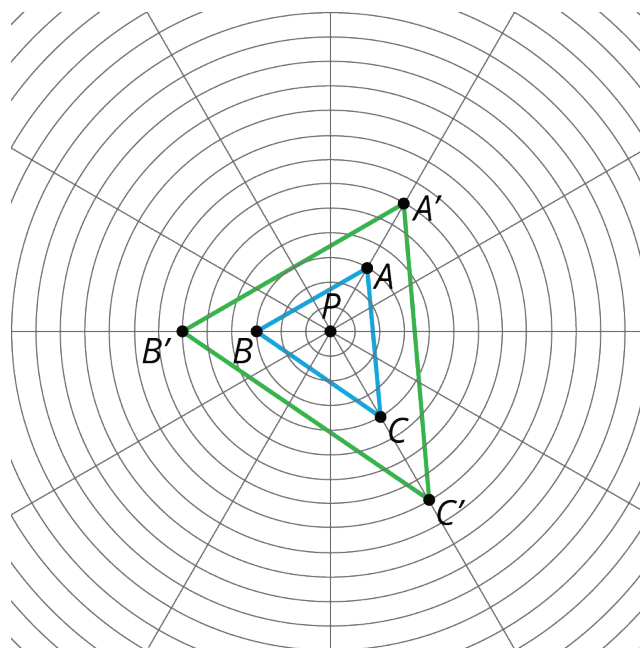
Lesson 2 Summary

A circular grid like this one can be helpful for performing **dilations**.

The radius of the smallest circle is one unit, and the radius of each successive circle is one unit more than the previous one.



To perform a dilation, we need a **center of dilation**, a scale factor, and a point to dilate. In the picture, P is the center of dilation. With a scale factor of 2, each point stays on the same ray from P , but its distance from P doubles:



Since the circles on the grid are the same distance apart, segment PA' has twice the length of segment PA , and the same holds for the other points.