

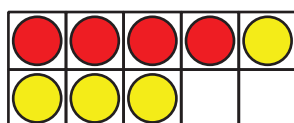
Lección 12: ¿Cuántas faltan?

- Llenemos tableros de 10 de diferentes maneras.

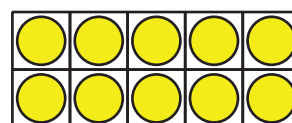
Calentamiento:Cuál es diferente: Tableros de 10

¿Cuál es diferente?

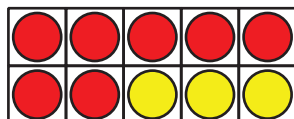
A



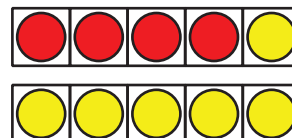
B



C



D



12.1: Revuelve, saca y organiza con 10

$$10 = 5 + 5$$

$$10 = 9 + 1$$

$$10 = 4 + 6$$

$$10 = 2 + 8$$

$$10 = 6 + 4$$

$$10 = 3 + 7$$

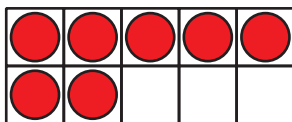
$$10 = 1 + 9$$

$$10 = 8 + 2$$

$$10 = 5 + 5$$

12.2: ¿Cuántas faltan para llenar el tablero de 10?

1.

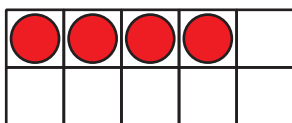


$10 = 7 + 3$

$10 = 8 + 2$

$10 = 5 + 5$

2.

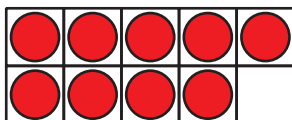


$10 = 8 + 2$

$10 = 1 + 9$

$10 = 4 + 6$

3.

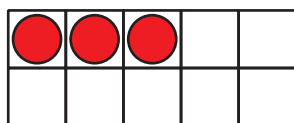


$10 = 9 + 1$

$10 = 5 + 5$

$10 = 7 + 3$

4.

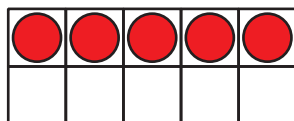


$$10 = 5 + 5$$

$$10 = 3 + 7$$

$$10 = 2 + 8$$

5.

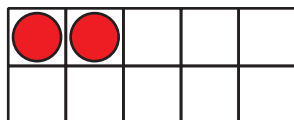


$$10 = 9 + 1$$

$$10 = 6 + 4$$

$$10 = 5 + 5$$

6.



$$10 = 1 + 9$$

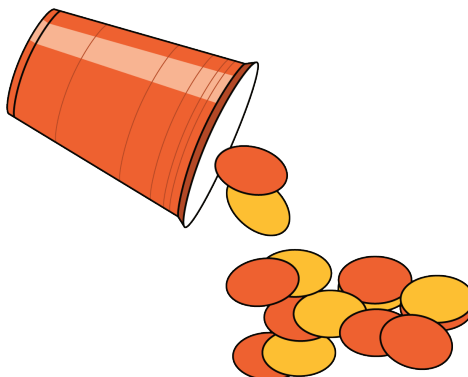
$$10 = 2 + 8$$

$$10 = 4 + 6$$


12.3: Centros: Momento de escoger

Escoge un centro.

Revuelve y saca



Contar colecciones



Lanza y suma

•• ••	• •	•• •• ••
•• •• ••	•• •• ••	•
•• •• ••	• •	•• •• •• ••

