

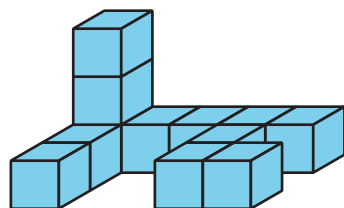
# Lesson 8: Figures Made of Prisms

- Let's find the volume of figures made of prisms.


## Warm-up: Which One Doesn't Belong: Different Figures

Which one doesn't belong?

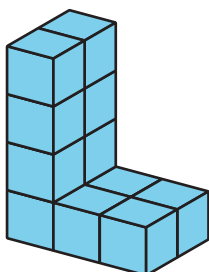
A




B



C



D







## 8.2: I See Two Prisms

Find the volume of each figure. Explain or show your reasoning.


a.



b.



c.



d.

