

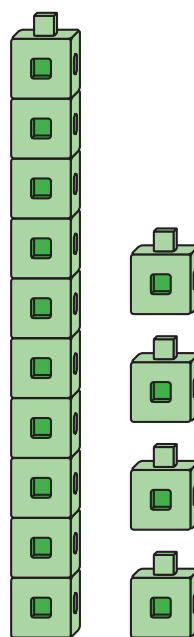
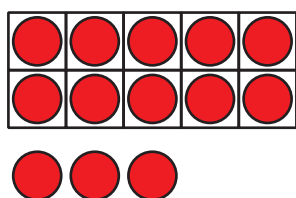
Lesson 9: Addition With a Ten

- Let's use a ten to make teen numbers.

Warm-up: Notice and Wonder: Teen Numbers

What do you notice?

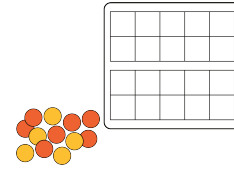
What do you wonder?



9.1: Make It: Teen Numbers and 10-Frames

Use your 10-frames to build teen numbers.

Write an equation that matches the teen number.



| teen number | equation |
|-------------|----------|
| | |
| | |
| | |
| | |
| | |
| | |
| | |
| | |
| | |
| | |

If you have time, write another equation for each of the teen numbers.

9.2: Equations With a Ten

Find the number that makes each equation true.

Show your thinking using drawings, numbers, or words.

$$1. 14 = 10 + \square$$

$$2. 10 + 5 = \square$$

$$3. 16 = \square + 6$$

$$4. 10 + \square = 12$$

$$5. \square + 3 = 13$$

$$6. 13 = \square + 10$$