

Lesson 14 Practice Problems

1. Evaluate each expression, giving the answer in scientific notation:

a. $5.3 \times 10^4 + 4.7 \times 10^4$

b. $3.7 \times 10^6 - 3.3 \times 10^6$

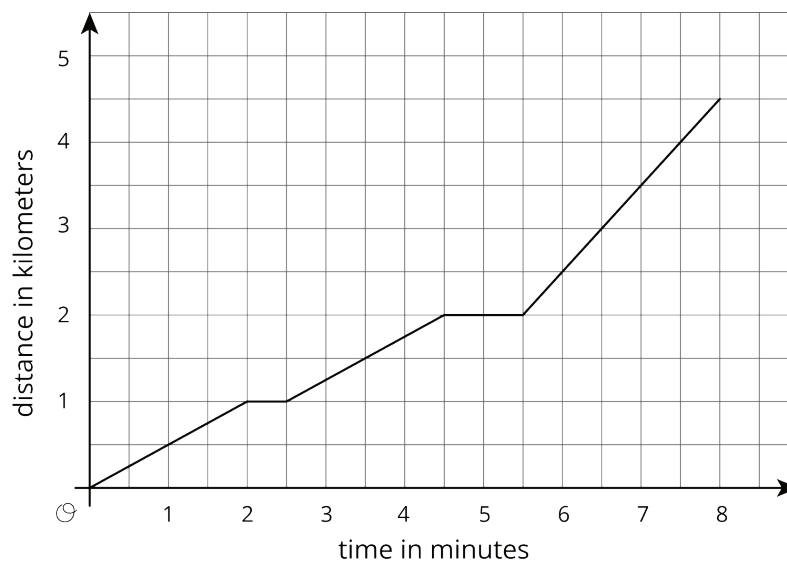
c. $4.8 \times 10^{-3} + 6.3 \times 10^{-3}$

d. $6.6 \times 10^{-5} - 6.1 \times 10^{-5}$

2. a. Write a scenario that describes what is happening in the graph.

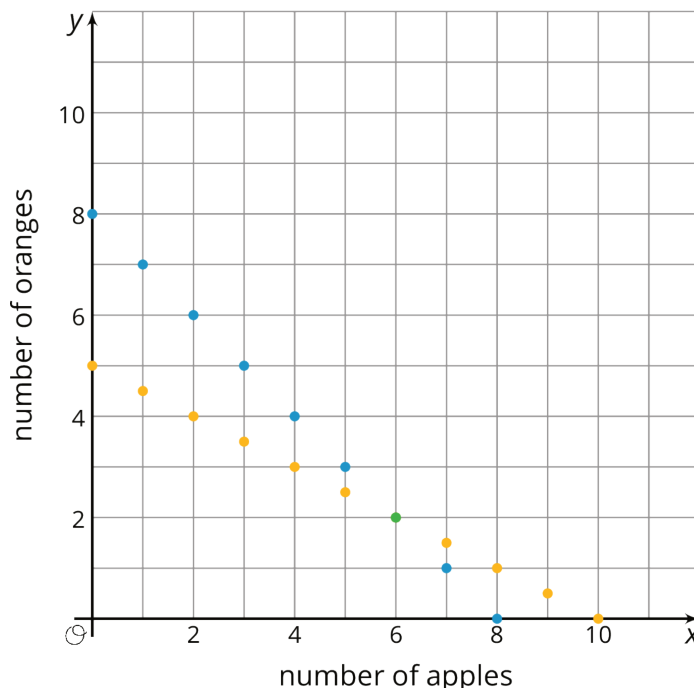
b. What is happening at 5 minutes?

c. What does the slope of the line between 6 and 8 minutes mean?



(From Unit 6, Lesson 10.)

3. Apples cost \$1 each. Oranges cost \$2 each. You have \$10 and want to buy 8 pieces of fruit. One graph shows combinations of apples and oranges that total to \$10. The other graph shows combinations of apples and oranges that total to 8 pieces of fruit.



- Name one combination of 8 fruits shown on the graph that whose cost does *not* total to \$10.
- Name one combination of fruits shown on the graph whose cost totals to \$10 that are *not* 8 fruits all together.
- How many apples and oranges would you need to have 8 fruits that cost \$10 at the same time?

(From Unit 5, Lesson 12.)

4. Solve each equation and check your solution.

$$-2(3x - 4) = 4(x + 3) + 6$$

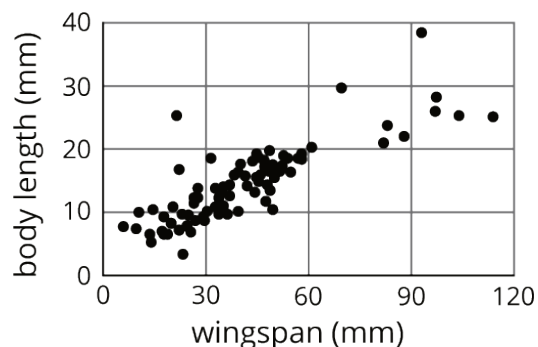
$$\frac{1}{2}(z + 4) - 6 = -2z + 8$$

$$4w - 7 = 6w + 31$$

(From Unit 4, Lesson 13.)

5. Ecologists measure the body length and wingspan of 127 butterfly specimens caught in a single field.

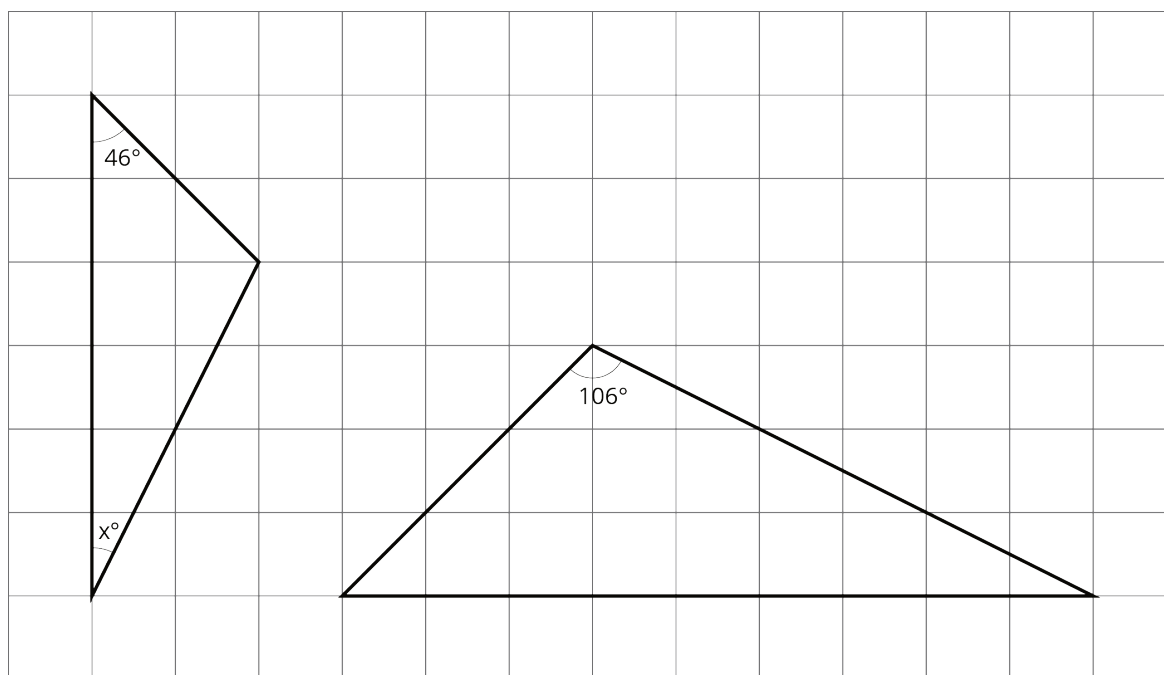
- Draw a line that you think is a good fit for the data.
- Write an equation for the line.



- What does the slope of the line tell you about the wingspans and lengths of these butterflies?

(From Unit 5, Lesson 20.)

6. The two triangles are similar. Find x .



(From Unit 2, Lesson 12.)