

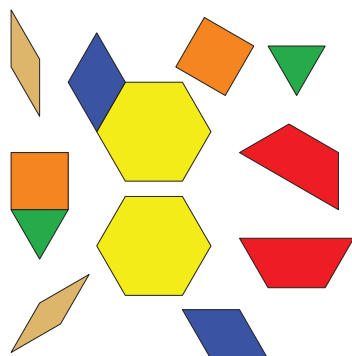
Lesson 2: More or Fewer Pattern Blocks

- Let's figure out if there are more triangle pattern blocks or trapezoid pattern blocks.


2.3: Introduce Pattern Blocks, Place the Last Pattern Block

Choose a center.


Pattern Blocks



Geoblocks



Grab and Count



Find the Pair



