

Grade 3 Unit 2

Lesson 4

CC BY 2021 Illustrative Mathematics®


Unit 2 Lesson 4: Area of Rectangles

WU Which One Doesn't Belong: Area and Arrays (Warm up)


Student Task Statement

Which one doesn't belong?


A



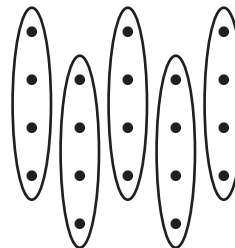
B



C




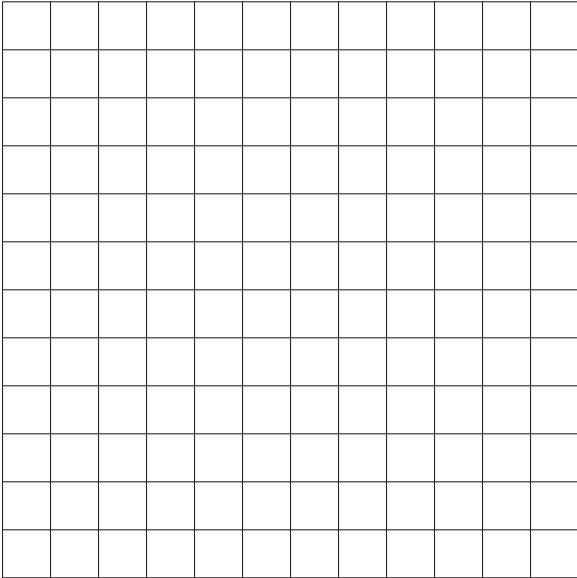
D



1 What Did I Create?

Student Task Statement

1. Can you and your partner draw the same rectangle without looking at each other's drawing?
 - Partner A: Draw a rectangle on one of the grids provided. Describe it to your partner without telling them the total number of squares.
 - Partner B: Draw the rectangle your partner describes to you.
2. Place your two rectangles next to each other. Discuss: What is the same? What is different?
3. Switch roles and repeat.

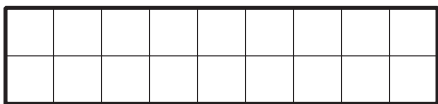


2 Find the Area

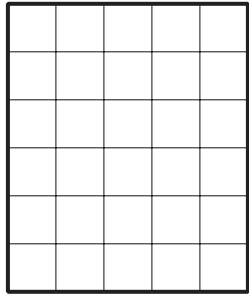
Student Task Statement

Find the area of each rectangle and include the units. Explain or show your reasoning.

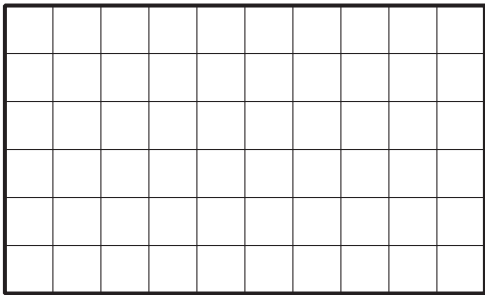
1.



2.



3.



4.

