

Kindergarten Unit 8

Lesson 21

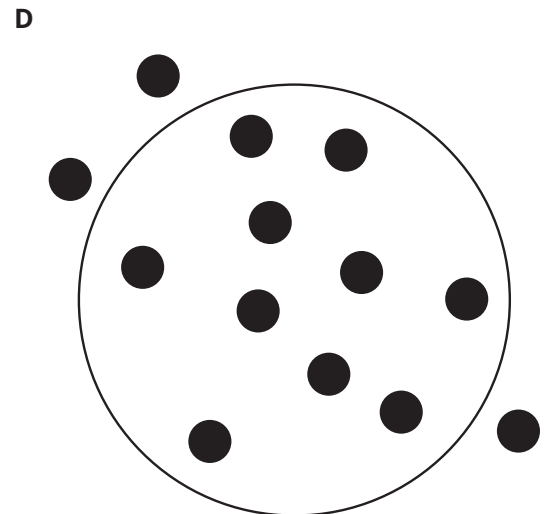


CC BY 2021 Illustrative Mathematics®

Unit 8 Lesson 21: Compose and Decompose Numbers 11–19

WU Which One Doesn't Belong: Numbers 11–20 (Warm up)

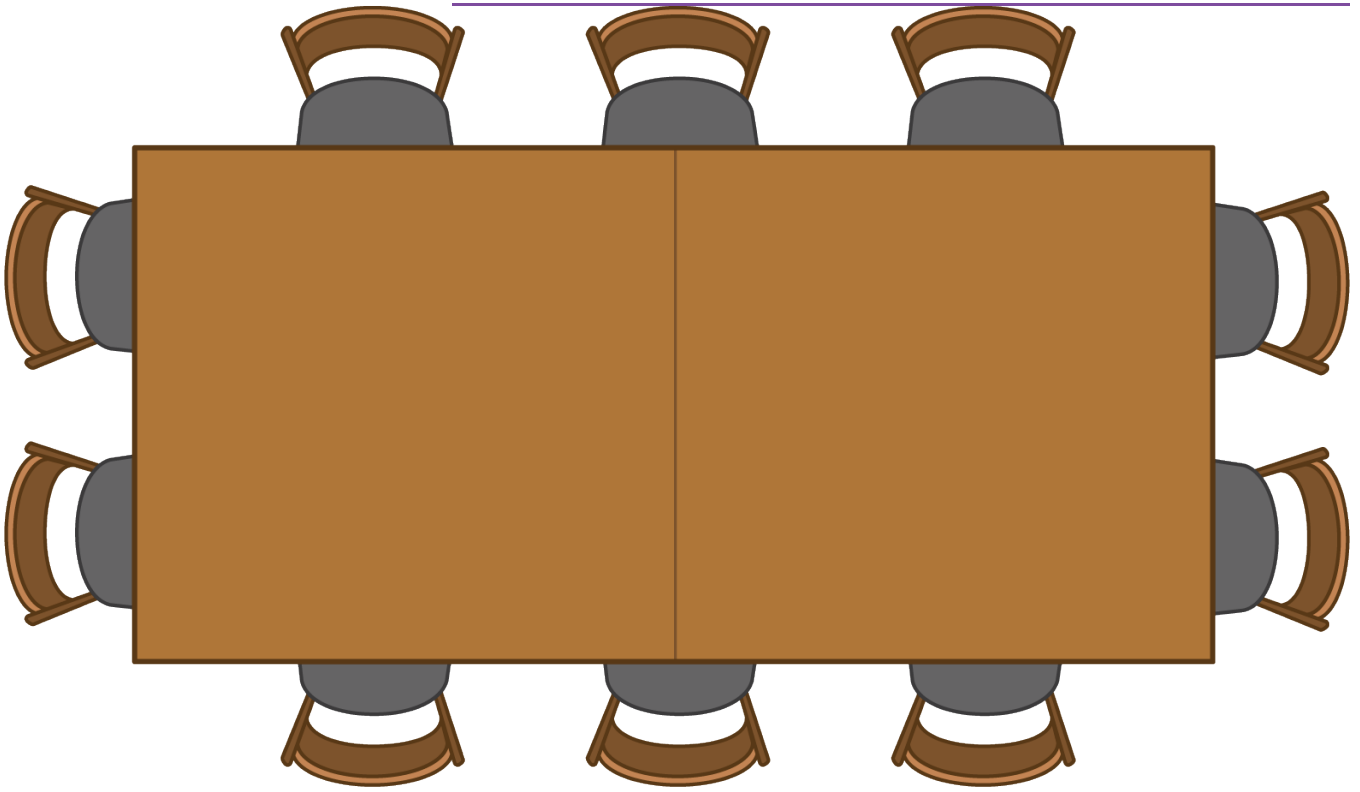
Student Task Statement

Which one doesn't belong?

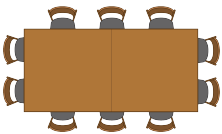


1 Where Will They Sit?

Student Task Statement

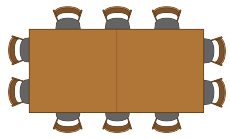


1.



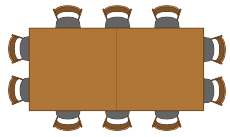
$$\underline{\hspace{2cm}} + \underline{\hspace{2cm}} = \underline{\hspace{2cm}}$$

2.



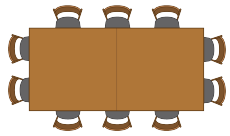
$$\underline{\hspace{2cm}} + \underline{\hspace{2cm}} = \underline{\hspace{2cm}}$$

3.



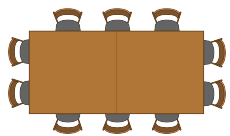
$$\underline{\hspace{2cm}} + \underline{\hspace{2cm}} = \underline{\hspace{2cm}}$$

4.



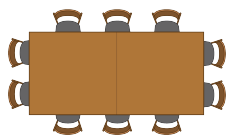
$$\underline{\hspace{2cm}} + \underline{\hspace{2cm}} = \underline{\hspace{2cm}}$$

5.



$$\underline{\hspace{2cm}} + \underline{\hspace{2cm}} = \underline{\hspace{2cm}}$$

6.



$$\underline{\hspace{2cm}} + \underline{\hspace{2cm}} = \underline{\hspace{2cm}}$$

2 Finish the Equations (Optional)

Student Task Statement

- $17 = 10 + \underline{\hspace{2cm}}$
- $19 = \underline{\hspace{2cm}} + 9$
- $10 + \underline{\hspace{2cm}} = 14$

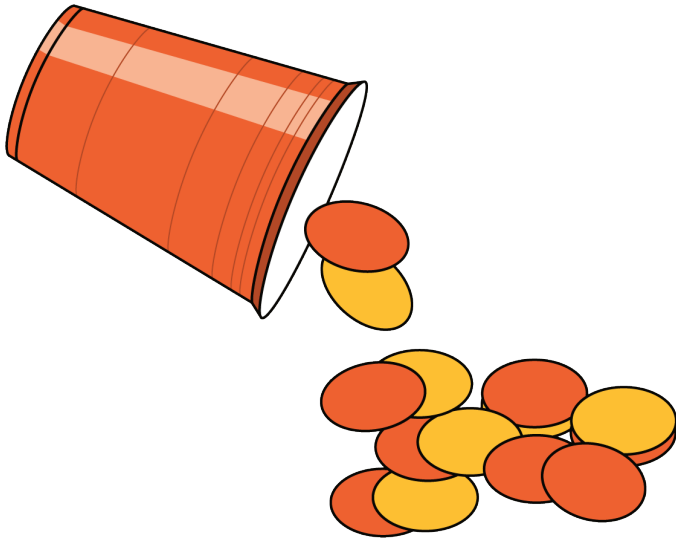
- _____ + 2 = 12
- 11 = _____ + 1
- 15 = 10 + _____

3 Centers: Choice Time


Student Task Statement

Choose a center.


Shake and Spill



Number Race



Grab and Count



What's Behind My Back?



Pattern Blocks

