

Grade 1 Unit 3

Lesson 17

CC BY 2021 Illustrative Mathematics®

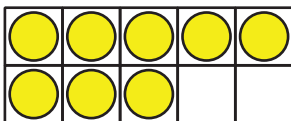
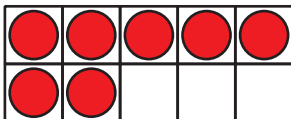
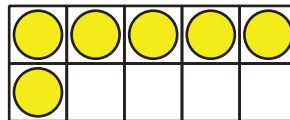
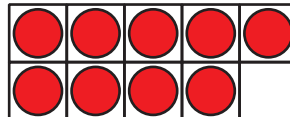
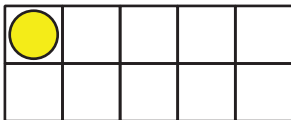

Unit 3 Lesson 17: Make 10 to Add

WU How Many Do You See: Double 10-frames (Warm up)

Student Task Statement

How many do you see?

How do you see them?



1 The 9 Plus Game

Student Task Statement

- Put out 9 counters.
- Pick a number card and add that many counters.
- Write an equation to represent the counters.
Can you write more than one?

Equations:

Round 1: _____

Round 2: _____

Round 3: _____

Round 4: _____

Round 5: _____

2 Clare's Birds

Student Task Statement

1. Clare draws some birds.
She draws 3 birds in a nest and 9 birds flying.
How many birds did she draw?
Show your thinking using drawings, numbers, or words.

Equation: _____

2. Clare draws birds that like warm weather.
She draws 6 toucans and 8 parrots.
How many birds did she draw?
Show your thinking using drawings, numbers, or words.

Equation: _____

3. Clare draws birds that like cold weather.
She draws 7 penguins and 5 owls.
How many birds did she draw?
Show your thinking using drawings, numbers, or words.

Equation: _____

