

Kínder Unidad 4

Lección 17

CC BY 2021 Illustrative Mathematics®

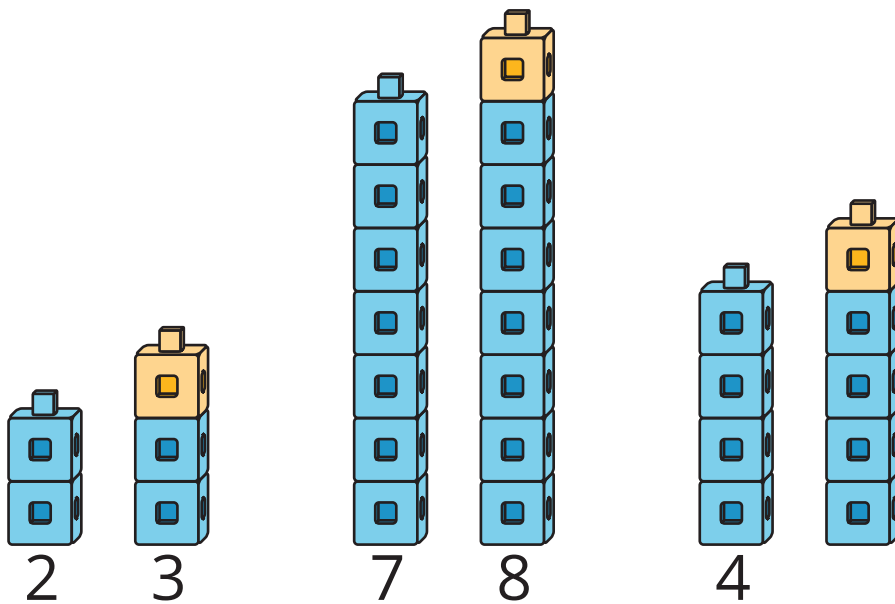
Unit 4 Lesson 17: Sumemos 0 y 1

WU Observa y pregúntate: Sumar 1 más (Warm up)

Student Task Statement

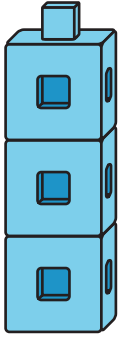
¿Qué observas?

¿Qué te preguntas?



1 Sumemos 0 y 1

Images for Launch



Student Task Statement

$4 + \underline{\quad}$

$2 + \underline{\quad}$

$8 + \underline{\quad}$

$3 + \underline{\quad}$

$9 + \underline{\quad}$

1 + _____

2 Observemos patrones con +0 y +1

Student Task Statement

4 + 0

4



2 + 0

2



8 + 0

8



3 + 1

4



9 + 1

10



1 + 1

2



3 Conozcamos “Encuentra el valor de expresiones: Colorea el total o la diferencia”

Student Task Statement










Escoge un centro.

Encuentra el valor de

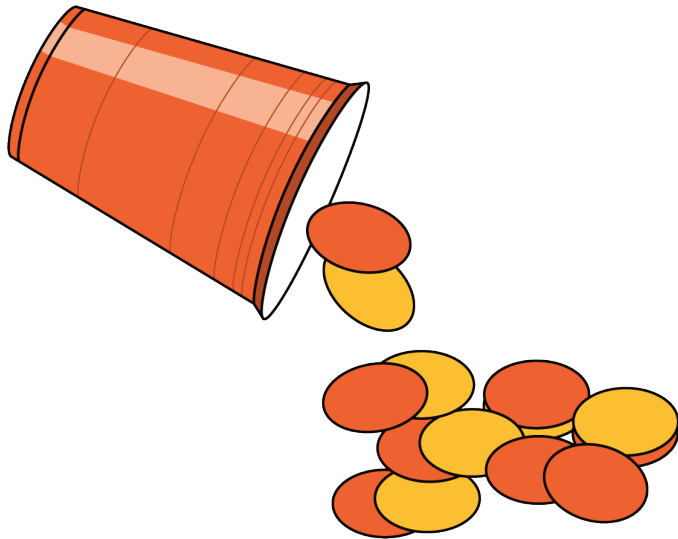
Lanza y suma

expresiones



$$3 + 5 \quad 7 - 5$$


Revuelve y saca



Historias matemáticas



Carrera con números



Images for Activity Synthesis

