

**Grade 2 Unit 8**

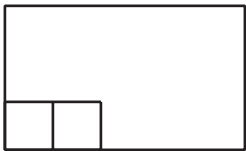
Lesson 12

CC BY 2021 Illustrative Mathematics®

**Unit 8 Lesson 12: Partition Rectangles into Squares****WU Estimation Exploration: Fill it Up (Warm up)**

## Student Task Statement

How many little squares would fill the rectangle?



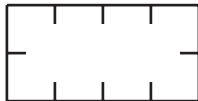
Record an estimate that is:

too low	about right	too high

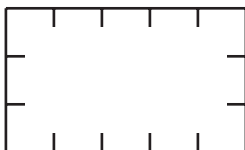
**1 How Many Squares?**

## Student Task Statement

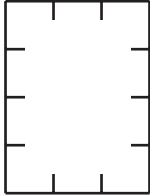
1. Build a rectangle with 8 tiles arranged in 2 rows. Use a ruler to partition the rectangle to match the rectangle you made.



2. Use a ruler to partition the rectangle using the tick marks as a guide.

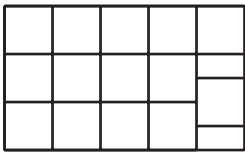


- 
- a. How many rows of equal-size squares did you make?
  - b. How many columns did you make?
  - c. Write 2 equations to represent the total number of equal-size squares.
3. Use a ruler to partition the rectangle using the tick marks as a guide.



- a. How many rows of equal-size squares did you make?
- b. How many columns did you make?
- c. Write 2 equations to represent the total number of equal-size squares.


### Activity Synthesis




## 2 Partition Rectangles


### Student Task Statement

1. Use 12 tiles to make a rectangle. Split one of the rectangles into equal-size squares to match your rectangle made of tiles.






- a. Write 2 equations to represent the total number of squares.
2. Split this rectangle into equal-size squares.






- a. Write 2 equations to represent the total number of squares.
3. Split this rectangle into equal-size squares.



- a. Write 2 equations to represent the total number of squares.

Images for Activity Synthesis







**B**

