



**Grade 2 Unit 8**

Lesson 9

CC BY 2021 Illustrative Mathematics®

## **Unit 8 Lesson 9: A Sum of Equal Addends**

**WU Estimation Exploration: How Many Waffles? (Warm up)**

Images for Launch



## Student Task Statement

How many waffles are on the tray?





Record an estimate that is:

too low	about right	too high

### 1 Sums of Rows and Sums of Columns

#### Student Task Statement


Mai and Diego represented the same array with different expressions.

Diego's expression

$$2 + 2 + 2 + 2 + 2 + 2$$

Mai's expression



$$6 + 6$$



Who do you agree with?

Show your thinking using diagrams, symbols, or other representations.

### Activity Synthesis



## 2 Card Sort: Arrays and Expressions

### Student Task Statement

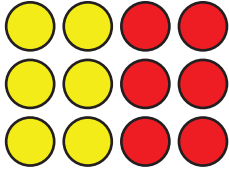
Your teacher will give you a set of cards that show arrays, expressions and a total number. Find the cards that match.

### 3 Add It All Up

---

#### Student Task Statement

1. a. How many counters are there in all?



- b. Explain how you found the total number of counters.  
c. Circle **2** expressions that represent the array.

$$3 + 3 + 3 + 3$$

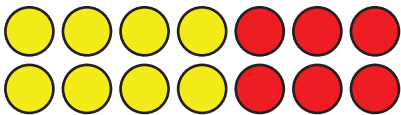
$$3 + 3 + 3$$

$$4 + 3$$

$$4 + 4 + 4$$

$$4 + 4 + 4 + 4$$

2. a. How many counters are there in all?



- b. Explain how you found the total number of counters.  
c. Circle **2** expressions that represent the array.

$$2 + 2 + 2 + 2 + 2 + 2 + 2$$

$$6 + 6$$

$$7 + 7$$

$$2 + 2 + 2 + 2 + 2$$

#### Images for Activity Synthesis

