

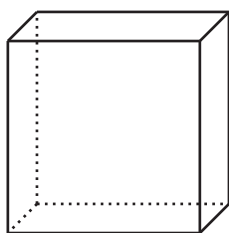
## Lesson 3: Shapes That Are Flat

- Let's sort flat shapes and explain how we sorted.

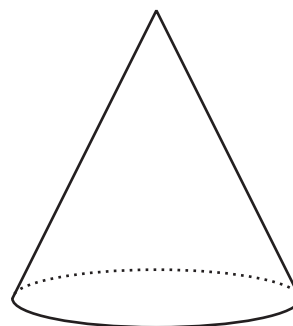
### Warm-up: Which One Doesn't Belong: All the Shapes

Which one doesn't belong?

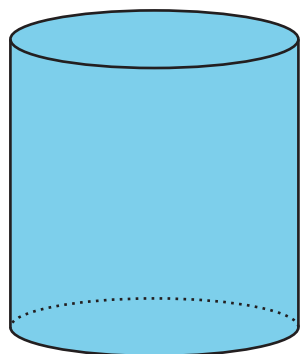
A




B



C



D



## 3.2: Shape Sort Gallery Walk

Group 1: They sorted

---

---

Group 2: They sorted

---

---

## Group 3: They sorted

---

---

