

## Lesson 11: All About Tape Diagrams

- Let's match diagrams, story problems, and equations.

### Warm-up: Number Talk: Addition and Subtraction

Find the value of each expression mentally.

- $7 + 13$
  
  
  
  
  
  
  
  
  
  
- $27 + 13$
  
  
  
  
  
  
  
  
  
  
- $40 - 13$
  
  
  
  
  
  
  
  
  
  
- $40 - 27$

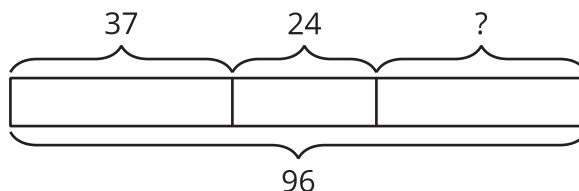
## 11.1: Represent Story Problems

Match the stories, diagrams, and equations.

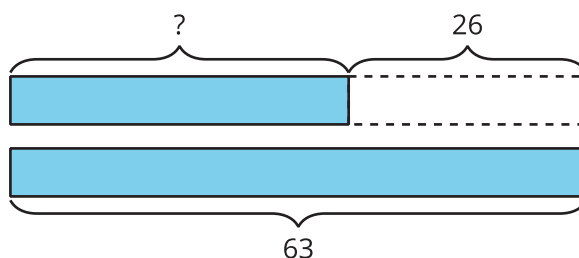
## 11.2: Write Stories

Choose one of the diagrams. Write and solve a story problem that the diagram could represent.

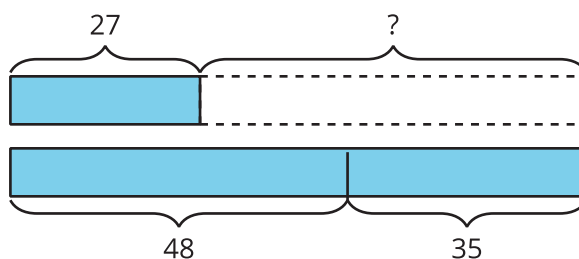
1.



2.



3.



Problem \_\_\_\_\_

---

---

---