

## Grade 2 Unit 2

### Lesson 1

CC BY 2021 Illustrative Mathematics®

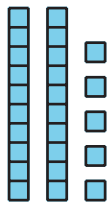
## Unit 2 Lesson 1: Add and Subtract to Compare

### WU Which One Doesn't Belong: Compare Representations (Warm up)

#### Student Task Statement

Which one doesn't belong?

**A**

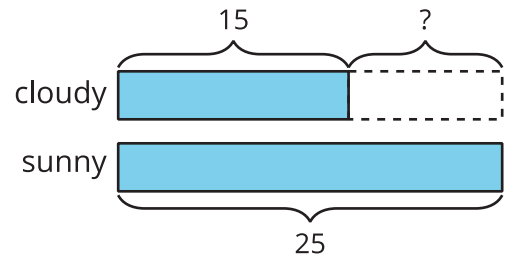


sunny

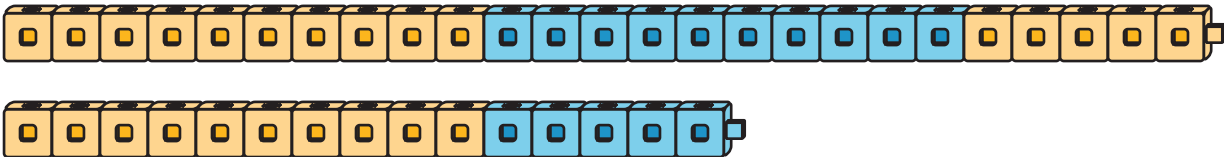


cloudy

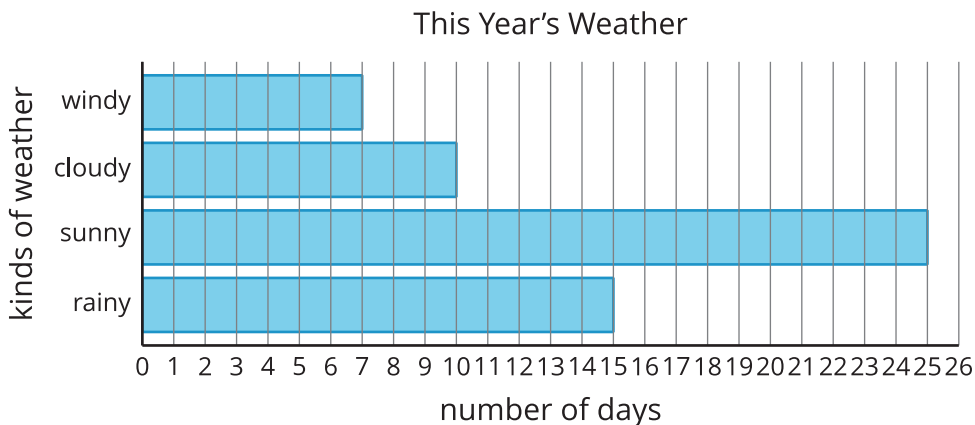
**B**



**C**



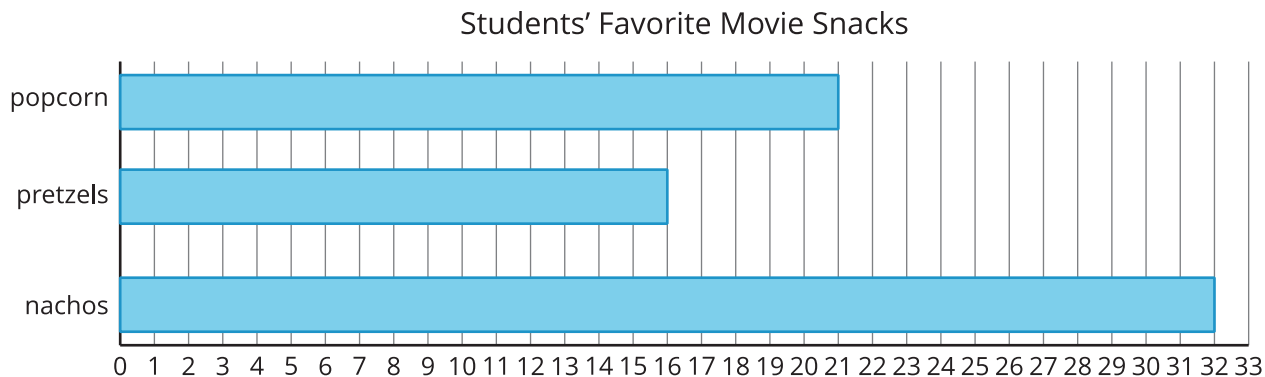
**D**



# 1 Movie Snacks

## Student Task Statement

Use the bar graph to answer the questions.



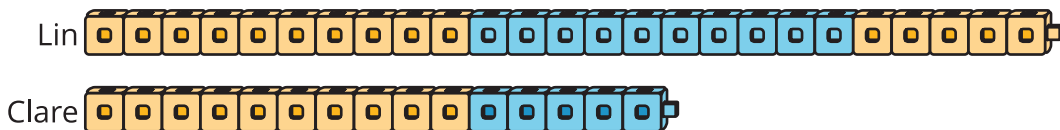
1. What is the total number of students that chose popcorn or pretzels? Show your thinking.
2. How many more students chose nachos than chose popcorn? Show your thinking.



# 2 Build and Compare

## Student Task Statement

1. Lin and Clare used cubes to make trains. What do you notice? What do you wonder?



2. Make trains with cubes.

partner	number of cubes
Partner A	46

---

partner	number of cubes
Partner B	22

3. Find the total number of cubes you and your partner used. Show your thinking.
4. Find the difference between the number of cubes you and your partner used. Show your thinking.